




QUESTION BANK
Grade 3- MATHEMATICS
Chapter 6 - Handling Data






1. The table below shows the mode of transport used by 30 students of class 3 while going on a picnic. Draw a pictograph to represent the given data.

Key:  = 2 children

Mode of transport	Number of students
Bus	10
Bicycle	6
Scooter	4
Bike	6
Rickshaw	4

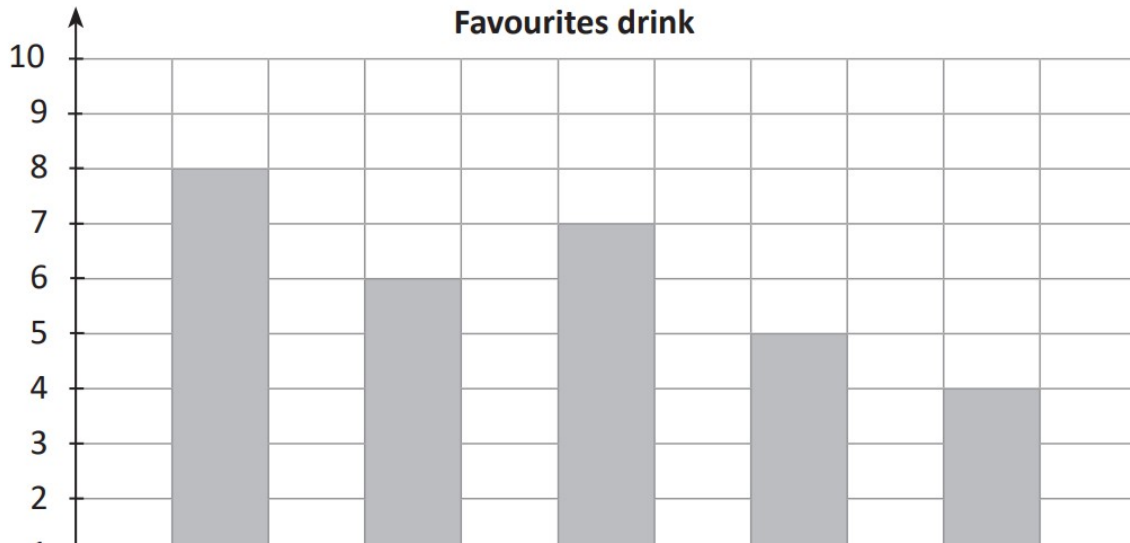
2. The given pictograph shows the number of books in a library. Study the pictograph and answer the questions that follow.

Key:  = 2 books

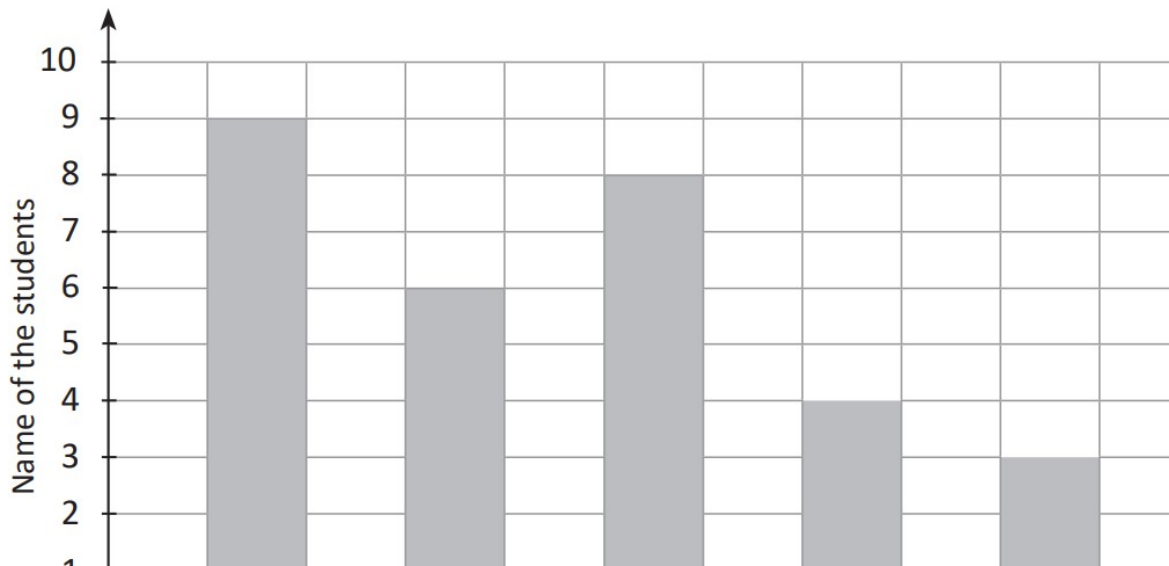
Subject	Number of books
English	
Hindi	
Math	
History	
Physics	

- Which subject books are maximum in number?
- How many English subject books are there?
- Find the number of History subject books.
- Which subject books are least in number?

3. 30 people who visited a restaurant, were surveyed about their favourite drink. The recorded and represented by a bar graph. Study the bar graph and answer the questions that follow.



- a. Which is the most preferred drink?
b. How many people like juice?
c. Out of milk and lassi, which drink is liked by more people?
4. The given bar graph shows the colours liked by 30 students. Study the bar graph and answer the questions that follow.



- a. Which is the most liked colour?
b. Identify the least liked colour.
c. How many students like yellow?
d. How many students like green?