


QUESTION BANK
Grade 3- MATHEMATICS
Chapter 4 - Time

1. Write the time shown by each of the following clocks.

a.



b.



c.



2. Fill in the blanks.

a.



The minute hand is pointing at _____. The time is _____

b.





The minute hand is pointing at _____. The time is _____

c.



The minute hand is pointing at _____. The time is _____

3. The children started playing at  and finished at .

What is the duration for which the children played?

4. Mohan boarded a bus at 11:00 and his journey lasted for one hour. At what time did the journey end?

5. A movie got over at 3:00. The time duration of the movie was two hours. At what time did the movie start?

6. A history class has a duration of 35 minutes. If the class begins at 10:30, at what time will it be over?

- 7.** What is the time?
- a. 30 minutes before 12:00
 - b. One hour after 10:30
 - c. 20 minutes before 11:00
 - d. 10 minutes after 3:50
 - e. 5 hours after 2:00
- 8.** Write a.m. or p.m. for the following.
- a. 7:40 in the morning
 - b. 2:30 in the afternoon
 - c. 8:00 in the evening
 - d. 11:00 in the night
 - e. 4:00 in the morning